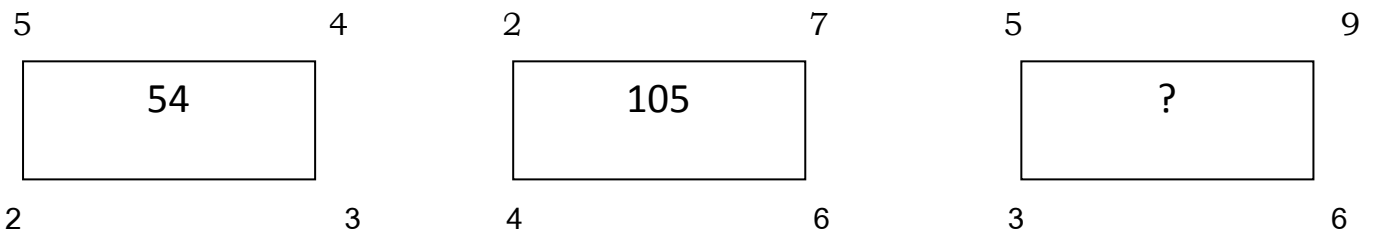


**DAV PUBLIC SCHOOL, SRESHTHA VIHAR**  
**QUESTION BANK – CLASS IV**

- Virat Kohli while batting hits 2 sixes, 6 fours, takes 5 threes, 14 twos and 20 Ones. Find the number of runs by which Kohli is missing his century.
  - 2
  - 1
  - 3
  - 5
- If the day before yesterday was Friday, what day will be the day after tomorrow?
  - Friday
  - Thursday
  - Wednesday
  - Tuesday
- Raghav ranks 8<sup>th</sup> from the top and 12<sup>th</sup> from the bottom in the class. How many students are there in the class?
  - 29
  - 17
  - 19
  - 21
- Find the missing no. in the pattern



- 115
  - 511
  - 150
  - 151
- Find the category of the given word so formed by combination of letter arranged accordingly form a meaningful word – R M C A H.
    - Weekday
    - Fruit
    - Flower
    - Month
  - Which one of the following is different from others?
    - 1000 Tens
    - 10000 Ones
    - 10 Thousands
    - 100 Tens
  - Five lakhs is equal to \_\_\_\_\_ thousands.
    - 500
    - 5
    - 5000
    - 50
  - $P = 45465$ ,  $Q = 40008$ ,  $R = 40878$  and  $S = 44444$ . Which one of the following is the greatest
    - $Q+R$
    - $P+Q$
    - $P+R$
    - $Q+S$
  - A truck is loaded with 215 crates that weigh 35 kg each. At the first stop, 75 crates are unloaded. How much weight is left on the truck?
    - 490 kg
    - 4900 kg
    - 7525 kg
    - 7600 kg
  - I have some money. If half of it is Rs. 13 less than Rs. 40, how much money do I have?
    - Rs. 26
    - Rs. 54
    - Rs. 27
    - Rs. 14
  - If tomorrow will be Tuesday, then what was the day before yesterday?
    - Sunday
    - Monday
    - Saturday
    - Friday
  - Forty seven thousand ten volunteers were needed to read to visually impaired students. So far 16,970 people have volunteered. How many more people are needed?

**DAV PUBLIC SCHOOL, SRESHTHA VIHAR**  
**QUESTION BANK – CLASS IV**

- a) 30,340  
b) 30,140
- c) 30,400  
d) 30,040
13. Mohit bought 17 bags of red balls and 15 bags of white balls. Each bag of balls had 20 pieces in it. Which expression could he use to find the total number of balls he bought?  
a)  $(20 \times 17) + 15$   
b)  $(20 \times 15) + 17$   
c)  $20 \times (17 + 15)$   
d)  $20 + (17 \times 15)$
14. Mona, Rita, Saba and Neha collect stamps. Mona and Rita have 575 stamps each, Saba has 175 stamps and Neha has 200 stamps. Which of these operations will have the total number of stamps that the 4 girls have?  
a) Add 575, 175 and 200  
b) Add 575, 175 and 200 and then multiply by 2  
c) Divide 575 by 2 and then add 175 and 200  
d) Multiply 575 by 2 and then add 175 and 200
15. Look at the alphabet series below  
A B C D E F G H I J K L M N O P Q R S T U V W X Y Z  
Which of the following is 9<sup>th</sup> to the left of 3<sup>rd</sup> alphabet from right end?  
a) P  
b) O  
c) N  
d) M
16. Complete the number pattern – 46980, 49480, \_\_\_\_\_, 54480  
a) 50480  
b) 52980  
c) 51980  
d) 53480
17. What is the product of all the numbers in the dial of a telephone?  
a) 1, 47, 480.00  
b) 1, 63, 450  
c) 3, 62, 880  
d) 0
18. Arrange from the greatest to the least fractions  
 $1/3, 1/6, 1/2, 1/7$   
a)  $1/7, 1/6, 1/3, 1/2$   
b)  $1/2, 1/3, 1/6, 1/7$   
c)  $1/3, 1/6, 1/2, 1/7$   
d)  $1/7, 1/3, 1/2, 1/6$
19. When you subtract 21,995 from 94,003, the difference is equal to\_\_  
a) 73992  
b) 72998  
c) 7300  
d) 72008
20. How many milliliters are there in ten liters?  
a) 10  
b) 100  
c) 1000  
d) 10000
21. If you add 1,000 to 25,898, the digit at \_\_\_\_ place increases by 1.  
a) Ten Thousand  
b) Thousands  
c) Hundreds  
d) Tens
22. There are 61 boxes of pencils in a store. There are 1 dozen pencils in each box. How many pencils are there in the store?  
a) 610  
b) 671  
c) 732  
d) 1220
23. There are 24 hours in one day, and 3,600 seconds in one hour. How many seconds are there in one day?  
a) 86400  
b) 14400  
c) 360024  
d) 3624
24. Rita reads a book in 20 days. She reads 16 pages every day for the first 15 days, and 18 pages every day for the last 5 days. How many pages did Rita read?  
a) 240  
b) 90  
c) 330  
d) 300



**DAV PUBLIC SCHOOL, SRESHTHA VIHAR**  
**QUESTION BANK – CLASS IV**

38. I was amazed ..... his brilliance.  
a) with c) by  
b) at d) to
39. She does not agree \_\_\_\_\_ me.  
a) with c) at  
b) by d) to
40. Which plural form of 'Monkey' is correct?  
a) Monkeyes c) Monkeys  
b) Monkeyie d) Monkeies
41. Which pronoun can be used for the highlighted words?  
'Hina and Tina are best friends.'  
a) We c) Them  
b) You d) They
42. Tony was in the class, \_\_\_\_\_?  
a) wasn't he c) was he  
b) were he d) weren't he
43. Priya needs a lot of money. \_\_\_\_\_ is under debt.  
a) He c) They  
b) I d) She
44. I could not go out because of the bad \_\_\_\_\_.  
a) Weather c) whether  
b) weather d) whetheer
45. A \_\_\_\_\_ in time saves nine.  
a) stitch c) sticch  
b) stich d) stitchh
46. Who is the writer of the famous 'Charlie and the Chocolate Factory'.  
a) Charles Dickens c) Roald Dahl  
b) Jean d) Louisa
47. Tick the adverb. 'He handled the glass carefully.'  
a) He c) handled  
b) glass d) carefully
48. My cousin is going to Assam.  
a) Proper Noun c) Collective Noun  
b) Common Noun d) None of the above
49. We \_\_\_\_\_ going to the zoo.  
a) are c) was  
b) is d) am
50. I \_\_\_\_\_ going to Mumbai next week.  
a) are c) am  
b) is d) will
51. Tick the synonym of the word 'Exhausted'.  
a) Happy c) Tired  
b) Energetic d) Contented
52. Tick the antonym of the word Vanish.  
a) Disappear c) Appear  
b) Evaporate d) Fade out
53. You better \_\_\_\_\_ while speaking to your teacher.  
a) mind Qs and Ps your c) mind your Ps and Qs  
b) Qs and Ps your mind d) Qs and Mind your Ps

**DAV PUBLIC SCHOOL, SRESHTHA VIHAR**  
**QUESTION BANK – CLASS IV**

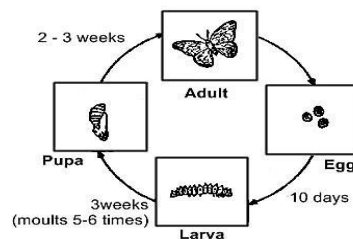
54. Stop \_\_\_\_\_ and let us know the real reason.  
a) beating bush around the  
b) beating around bush the  
c) beating around the bush  
d) beating bush the around
55. When I received the first prize I was \_\_\_\_\_.  
a) cloud on nine  
b) on nine cloud  
c) on cloud nine  
d) None of the above
56. I have \_\_\_\_\_ really hard for this project.  
a) working  
b) works  
c) worked  
d) work
57. Payal \_\_\_\_\_ beautifully.  
a) dancing  
b) dances  
c) dance  
d) dancinged
58. Find the synonym of the word 'Endurance'.  
a) Stamina  
b) Healthy  
c) Tired  
d) Demand
59. Rajiv goes for a walk \_\_\_\_\_.  
a) yesterday  
b) tomorrow  
c) Friday  
d) daily
60. I left my \_\_\_\_\_ of keys here.  
a) hive  
b) rookery  
c) bunch  
d) group
61. What is the \_\_\_\_\_ answer of this question?  
a) right  
b) write  
c) rite  
d) righte
62. Will you go \_\_\_\_\_ the store with me?  
a) two  
b) tooo  
c) too  
d) to
63. The old man was \_\_\_\_\_ by a dog.  
a) bitted  
b) bit  
c) bitten  
d) bite
64. There are \_\_\_\_\_ consonants.  
a) 26  
b) 28  
c) 21  
d) 25
65. The Harry Potter series is written by \_\_\_\_\_.  
a) J.K Rowling  
b) John  
c) Pearson Jean  
d) Ronny
66. I ran out of the room. Here 'I' is a \_\_\_\_\_.  
a) adjective  
b) noun  
c) preposition  
d) pronoun
67. Tick the word which should be capitalised.  
a) delhi  
b) boy  
c) danced  
d) pizza
68. The eagle was \_\_\_\_\_ than the blue bird.  
a) big  
b) bigger  
c) biggest  
d) most big
69. In which of these seasons will you see a rainbow more often?  
a) Summer  
b) Monsoon  
c) Winter  
d) Rainbow can be seen at all times even at night

**DAV PUBLIC SCHOOL, SRESHTHA VIHAR**  
**QUESTION BANK – CLASS IV**

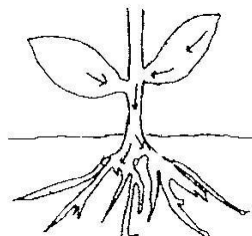
70. Which material is got from animals and is used to make clothes?  
a) Silk  
b) Iron  
c) Cotton  
d) Wax
71. Fuel is used up to give energy in order to make things work. Petrol is a type of fuel used in vehicles to make them run. Which of these is also a fuel?  
a) Water used in a bath  
b) Food eaten by a person  
c) Air pumped in cycle tyres  
d) Steam given out by pressure cooker
72. In order to have a non-stop flight, a plane has to be given fuel in the middle of the flight. Which of these is necessary for mid-air refueling to happen?  
a) One plane should be smaller than the other  
b) The planes should be flying above the clouds  
c) Planes should be flying as fast as each other (same speed)  
d) One plane should be flying upwards and the other downwards
73. Shushila has brown eyes. The following people in her family have brown eyes whom could she have got her brown eyes from?  
a) her niece  
b) her sister  
c) her daughter  
d) her grandmother
74. In the movie Sholay the villain captures the hero and then makes his friend dance on small pieces of some material without any shoes. Because of this blood starts coming out of his friend's feet. What could the pieces of material be?  
a) Cotton  
b) Rubber  
c) Sponge  
d) Glass
75. When a coin is dropped in a glass of water, it will \_\_\_\_\_.  
a) Float  
b) Sink  
c) Float mid-way  
d) Break the glass
76. The change of a substance from the liquid state to the gaseous state is called:-  
a) Evaporation  
b) Condensation  
c) Sublimation  
d) Filtration
77. The change of a substance from the gaseous state to the liquid state is called  
a) Condensation  
b) Decantation  
c) Sedimentation  
d) Evaporation
78. The change of a substance from the solid state to the gaseous state is called  
a) Sublimation  
b) Evaporation  
c) Melting  
d) Filtration
79. Bees must collect nectar from approximately how many flowers to make 1 pound of honeycomb? Is it:  
a) 10 thousand  
b) 2 million  
c) 20 million  
d) 50 million
80. The only species of cat that lives and hunts in groups is:  
a) Lion  
b) Leopard  
c) Jaguar  
d) Cougar
81. In daylight the human eye is most sensitive to which colour?  
a) Green  
b) Red  
c) Blue  
d) Orange
82. What is the study of weather called?  
a) Biology  
b) Zoology  
c) Meteorology  
d) Trigonometry
83. Which is the most important source of energy?  
a) The Clouds  
b) The Land  
c) The Moon  
d) The Sun

**DAV PUBLIC SCHOOL, SRESHTHA VIHAR**  
**QUESTION BANK – CLASS IV**

84. When do the frogs and turtles go for long sleep?  
 a) Summer  
 b) Rainy season  
 c) Winter  
 d) All of these
85. What kind of electric power is produced by the use of water?  
 a) Solar electric power  
 b) Hydroelectric power  
 c) Mechanical electric power  
 d) All of the above
86. Which cycle is correct?  
 a) morning → sunrise → afternoon → sunset  
 b) summer → fall → winter → spring  
 c) seed → mature → plant fruit → seedling  
 d) baby → teenager → child → adult
87. Which unit is used to measure how warm or cool the air is?  
 a) Grams  
 b) Kilo Meters  
 c) Degrees Celsius  
 d) Cubic Centimeters
88. A soil sample contains living and non-living materials. Which material was once living?  
 a) Sand particles  
 b) Decomposing leaves  
 c) Small pebbles  
 d) Water droplets
89. Which kind of energy is produced when a student beats a drum?  
 a) Electrical  
 b) Sound  
 c) Light  
 d) Chemical
90. In order to survive, all animals need –  
 a) Roots, Leaves, and Stems  
 b) Eyes, Nose, and Ears  
 c) Light, Soil, and Nutrients  
 d) Food, Water, and Air
91. What does a seed contain that provides energy for germination?  
 a) Water  
 b) Stored food  
 c) Soil  
 d) Sunlight
92. The main purpose of a plant's flowers is to  
 a) Provide support  
 b) Provide water  
 c) Produce seeds  
 d) Produce food
93. What is one healthy way that people can help to maintain their weight?  
 a) Washing their hands regularly  
 b) Brushing their teeth twice daily  
 c) Sleeping 8 hours daily  
 d) Exercising regularly
94. What is shown in the diagram below?



- a) a life span  
 b) a population  
 c) a life cycle  
 d) a community
95. The arrows in given diagram show the path taken by



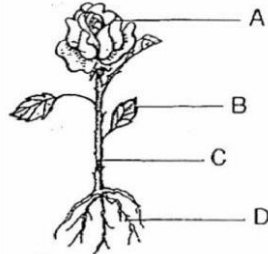
**DAV PUBLIC SCHOOL, SRESHTHA VIHAR**  
**QUESTION BANK – CLASS IV**

- a) Sunlight
- b) Food
- c) Carbon dioxide
- d) Water

96. Which of the following is NOT required for the process of Photosynthesis?

- a) Water and minerals
- b) Sunlight
- c) Oxygen
- d) Chlorophyll

97. Which of these statements is true about the labelled parts of the plant?



- a) C makes food for the plant
- b) B fixes the plant in the soil
- c) Fruit is formed from D
- d) We get potato from C part of potato plant and radish from D part of a radish plant

98. By looking at which body part/s of the honey bee, can you identify it as an insect?



- a) Number of legs
- b) Number of wings
- c) Location of antenna
- d) Presence of 3 body parts

99. Which is the largest ocean in the world?

- a) Indian ocean
- b) Arctic ocean
- c) Pacific ocean
- d) Atlantic ocean

100. Which of the following divides the Earth into two hemispheres?

- a) Tropic of Cancer
- b) Equator
- c) Line of Latitude
- d) Tropic of Capricorn

101. What is the longest mountain range in the US?

- a) Rocky Mountain Range
- b) Alaska Range
- c) Appalachian Mountains
- d) Cascades

102. What is the largest continent?

- a) North America
- b) Antarctica
- c) Asia
- d) South America

103. What does the star (\*) symbol on a map show?

- a) National movement
- b) State Capital
- c) City
- d) River

104. The document which establishes the basic principles of government is called \_\_

- a) Star spangled banner
- b) Congress
- c) Declaration of Independence
- d) Constitution

105. Which of the following is NOT a branch of government?

- a) Senate
- b) Executive
- c) Legislative
- d) Judicial

106. What person is the leader of our country and in command of the military?

- a) President
- b) Speaker of the house




**DAV PUBLIC SCHOOL, SRESHTHA VIHAR**  
**QUESTION BANK – CLASS IV**

- c) Vice President  
107. What information can be found on a map?  
a) Mountain ranges  
b) Fast food restaurants  
108. How many continents are there?  
a) 7  
b) 6  
109. What is the longest river in the world?  
a) The Colorado River  
b) The Nile  
110. What is the largest island in the world?  
a) Hawaii  
b) Greenland  
111. What is the smallest continent?  
a) Australia  
b) South America  
112. Which is the highest mountain range in the world?  
a) Kanchenjunga  
b) The Himalayas  
113. When is 'Earth Day' celebrated?  
a) 22<sup>nd</sup> April  
b) 20<sup>th</sup> April  
114. Which is the best soil for growing crops?  
a) Alluvial soil  
b) Sandy soil  
115. Which of the following is the capital of Sikkim?  
a) Gangtok  
b) Imphal  
116. Which city in Madhya Pradesh is known as Lake City?  
a) Indore  
b) Bhopal  
117. Spring equinox for northern hemisphere is observed on  
a) March 20  
b) December 22  
118. Indian government launched project tiger in  
a) 1980  
b) 1973  
119. No discrimination on the basis of religion is \_\_\_\_\_  
a) Communalism  
b) Secularism  
120. \_\_\_\_\_ ocean fills the gap between Asia and Australia.  
a) Pacific ocean  
b) Atlantic ocean  
121. \_\_\_\_\_ receives the highest rainfall in the world.  
a) Shimla  
b) Agartala  
122. \_\_\_\_\_ language was developed under the Persian and Arabic rule.  
a) Urdu  
b) Persian
- d) Leader of opposition  
c) Campgrounds  
d) Both A and B  
c) 5  
d) 8  
c) The Amazon River  
d) The Ganga River  
c) Australia  
d) Lakshadweep  
c) Antarctica  
d) Africa  
c) Mount Everest  
d) None of these  
c) 18<sup>th</sup> April  
d) 23<sup>rd</sup> April  
c) Clay soil  
d) All of these  
c) Kohima  
d) Itanagar  
c) Gwalior  
d) Jabalpur  
c) September 23  
d) June 21  
c) 1974  
d) 1982  
c) Federalism  
d) Franchise  
c) Indian ocean  
d) Arctic ocean  
c) Shillong  
d) Mawsynram  
c) Arabic  
d) Sanskrit


**DAV PUBLIC SCHOOL, SRESHTHA VIHAR**  
**QUESTION BANK – CLASS IV**

123. In this system religious leaders hold the power
- a) Monarchy
  - b) Theocracy
  - c) Dictatorship
  - d) Democracy
124. Raw materials which are converted into useful products comes under\_\_\_\_\_.
- a) Primary
  - b) Secondary
  - c) Tertiary
  - d) Non agricultural activities
125. The name of NELSON MANDELA'S autobiography is
- a) Long walk for freedom
  - b) Story of my life
  - c) Mein Kampf
  - d) My experiments with truth
126. You plan to buy a T.V. You have to pay\_\_\_\_\_ tax.
- a) Entertainment
  - b) Movies
  - c) Amusement
  - d) Sales
127. Planet having the largest moon\_\_\_\_\_.
- a) Neptune
  - b) Uranus
  - c) Jupiter
  - d) Saturn
128. Scholar who cured diseases using herbs\_\_\_\_\_.
- a) Balbhatta
  - b) Charak
  - c) Varahmihira
  - d) Aryabhata
129. The longest poem in the world literature is\_\_\_\_\_.
- a) Mahabharata
  - b) Ramayana
  - c) My blah story
  - d) Abhigyan Shakuntalam
130. What is the currency of Argentina?
- a) Peso
  - b) US dollar
  - c) Taka
  - d) Dinar
131. Which company got MNC of the year 2017?
- a) Yamaha
  - b) Fascino
  - c) Hero motorcup
  - d) Baja
132. Who played the main character in the movie RUSTOM?
- a) Akshay Kumar
  - b) Salman Khan
  - c) Shahrukh Khan
  - d) Aamir Khan
133. Which day is celebrated as international day of families?
- a) June 10
  - b) May 15
  - c) July 16
  - d) March 25
134. Verification of login name and password in computer is called?
- a) Configuration
  - b) Accessibility
  - c) Authentication
  - d) Logging in
135. Agra is situated on the bank of river?
- a) Ganga
  - b) Yamuna
  - c) Narmada
  - d) Gomti
136. Which country is known as Land of Rising Sun?
- a) South Korea
  - b) India
  - c) China
  - d) Japan
137. Which of the following number is completely divisible by 2, 3, 4 and 5?
- a) 1000
  - b) 1100
  - c) 1200
  - d) 1300
138. Estimate the product by rounding each number to the nearest hundred:  $241 \times 382$
- a) 800
  - b) 8000
  - c) 80000
  - d) 800000

**DAV PUBLIC SCHOOL, SRESHTHA VIHAR**  
**QUESTION BANK – CLASS IV**

139. Which of the following is a medicinal plant?  
a) Neem  
b) Eucalyptus  
c) Aloevera  
d) All of these
140. We should cross the road when the traffic light is?  
a) Red  
b) Green  
c) Yellow  
d) Blue
141. Which of the following number is divisible by 2, 4 and 6?  
a) 8  
b) 16  
c) 20  
d) 24
142. The character of Gabbar Singh in the famous film Sholay is played by?  
a) Amitabh Bachchan  
b) Amjad Khan  
c) Dharmendra  
d) Sanjeev Kumar
143. The dog jumped  the table.  
a) up  
b) into  
c) in  
d) upon
144. Which number will completely divide 16, 20 and 24?  
a) 3  
b) 4  
c) 5  
d) 6
145. Traffic signal of which colour ask us to stop?  
a) Green  
b) Yellow  
c) Red  
d) Blue
146. How many times do Muslims offer namaz in a day?  
a) 2  
b) 3  
c) 4  
d) 5
147. Which is the 2nd largest country in the world?  
a) Russia  
b) Canada  
c) USA  
d) China
148. Which of the following do we use for Painting?  
a) Knife  
b) Brush  
c) Plough  
d) Hammer
149. How many hours the day has?  
a) 6 hours  
b) 12 hours  
c) 18 hours  
d) 24 hours
150. 1024 Kilobytes is equal to?  
a) 8 Bits  
b) 1 Megabyte (MB)  
c) 1 Gigabyte (GB)  
d) 1 Byte
151. Deepa Karmakar is associated with which sports?  
a) Badminton  
b) Shooting  
c) Boxing  
d) Gymnastics
152. Capital of Uttarakhand is?  
a) Lucknow  
b) Allahabad  
c) Dehradun  
d) Ranchi
153. If  $x + 22 = 50$ , then find the value of x?  
a) 18  
b) 28  
c) 38  
d) 30
154. How many numbers between 1 to 100 are divisible by 5?  
a) 10  
b) 15  
c) 20  
d) 25

**DAV PUBLIC SCHOOL, SRESHTHA VIHAR**  
**QUESTION BANK – CLASS IV**

155. Which of the following number is divisible by 3, 6 and 9?  
a) 45  
b) 54  
c) 63  
d) 81
156. Who is the author of the book - Broken Wing?  
a) Mahatma Gandhi  
b) Annie Besant  
c) Sarojini Naidu  
d) Dadhabhai Naoroji
157. Fastest animal on earth is?  
a) Cheetah  
b) Lion  
c) Deer  
d) Tiger
158. Subtract the following:  $8006 - 6479 = ?$   
a) 1469  
b) 1527  
c) 1587  
d) 1368
159. Capital of Canada is?  
a) Ottawa  
b) Canberra  
c) Montreal  
d) Victoria
160. A plant that cannot stand on its own is called?  
a) Climber  
b) Herb  
c) Shrub  
d) Tree
161.  $12 \times 10 = 50 + 37 + ?$ . Find the missing number.  
a) 22  
b) 33  
c) 44  
d) 55
162. Young one of a cat is called?  
a) Calf  
b) Kitten  
c) Puppy  
d) Cub
163. Add:  $7123 + 9803 = ?$   
a) 16925  
b) 16926  
c) 16927  
d) 16928
164. The .....is fine today.  
a) whether  
b) weather  
c) wether  
d) wheather
165. An output device used to convert a text or an image into its electronic representation, which can be viewed on the monitor is called?  
a) Plotter  
b) Scanner  
c) Printer  
d) Web Camera
166. There are 100 balls in a bag. How many balls are there in 20 such bags?  
a) 200  
b) 2000  
c) 20000  
d) 1000
167. Sun is a?  
a) star  
b) Planet  
c) Comet  
d) Asteroid
168. A place where bees are kept is called?  
a) Apiary  
b) Aviary  
c) Zoo  
d) Nest
169. सोनाली बाजार से ----- लेने गई हैं। दिए गए वाक्य के लिए सही विकल्प चुनिए।  
क- सम्मान                      ख- सामान                      ग- समान                      घ- सामन
170. ----- होते ही प्रकाश फैल जाता है।  
क -सूर्योदय                      ख - सूर्यास्त                      ग -रोशनी                      घ - अंधकार





**DAV PUBLIC SCHOOL, SRESHTHA VIHAR**  
**QUESTION BANK – CLASS IV**

ANSWERS-

1- B	2- D	3- C	4- D	5- D	6- D	7- A	8- C	9- B	10- B
11- C	12- D	13- C	14- D	15- B	16- C	17- D	18- C	19- D	20- D
21- B	22- C	23- A	24- C	25- B	26- A	27- B	28- A	29- B	30- C
31- D	32- B	33- C	34- A	35- D	36- A	37- A	38- B	39- A	40- C
41- D	42- A	43- D	44- B	45- A	46- C	47- D	48- A	49- A	50- C
51- C	52- C	53- C	54- C	55- C	56- C	57- B	58- A	59- D	60- C
61- A	62- D	63- C	64- C	65- A	66- D	67- A	68- B		

69-B	70-A	71-B	72-D	73-D	74- D	75-B	76-A	77-A	78-A
79-C	80-A	81-A	82-C	83-D	84-A	85-B	86-B	87-C	88-B
89-B	90-D	91-B	92-C	93-D	94-C	95-B	96-C	97-D	98-D
99-C	100-B	101-A	102-C	103-B	104-D	105-A	106-A	107-D	108-A
109-B	110-B	111-A	112-C	113-A	114-A	115-A	116-B	117-A	118-B
119-B	120-C	121-D	122-A	123-B	124-B	125-A	126-D	127-C	128-B
129-A	130-A	131-C	132-A	133-B	134-D	135-B	136-D	137-C	138-C
139-D	140-B	141-D	142-B	143-D	144-B	145-C	146-D	147-A	148-B
149-D	150-B	151-D	152-C	153-B	154-C	155-B	156-C	157-A	158-B
159-A	160-A	161-B	162-B	163-B	164-B	165-B	166-B	167-A	168-A
169-ख	170-क	171-ख	172-घ	173-ख	174-ख	175-ख	176-घ	177-ग	178-घ
179-क	180-क	181-क	182-ग	183-ग	184-क	185-ग	186-घ	187-ख	188-क
189-क	190-क	191-ख	192-ग	193-ख	194-ग	195-ख	196-ग	197-ख	198-ग
199-घ	200-ख								